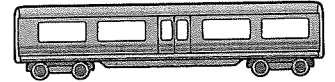


Fad

1. (a)	(b) cm mm	(c) m cm	(d)	(e)	(f) cm mm
$\begin{array}{r} 5.6 \\ \times 6 \\ \hline \end{array}$	$\begin{array}{r} 47 \\ \times 5 \\ \hline \end{array}$	$\begin{array}{r} 835 \\ \times 9 \\ \hline \end{array}$	$\begin{array}{r} 12.59\text{m} \\ \times 8 \\ \hline \end{array}$	$\begin{array}{r} 26.7\text{m} \\ \times 7 \\ \hline \end{array}$	$\begin{array}{r} 198 \\ \times 8 \\ \hline \end{array}$

2. (a)	(b) km m	(c)	(d) km m	(e)	(f) km m
$\begin{array}{r} 7.535\text{km} \\ \times 6 \\ \hline \end{array}$	$\begin{array}{r} 3466 \\ \times 8 \\ \hline \end{array}$	$\begin{array}{r} 9.074\text{km} \\ \times 4 \\ \hline \end{array}$	$\begin{array}{r} 1758 \\ \times 9 \\ \hline \end{array}$	$\begin{array}{r} 43.603\text{km} \\ \times 8 \\ \hline \end{array}$	$\begin{array}{r} 36758 \\ \times 7 \\ \hline \end{array}$

3. I gCathair Nua-Eabhaic bhí dhá chineál carráistí traenach in úsáid faoin talamh. Bhí ceann díobh 22.86m ar fad (R44) agus bhí an ceann eile 18.29m ar fad (R143). Cén difríocht a bhí idir fad 6 R44 agus 8 R143? _____



4. Cheannaigh Pól roinnt insliú lochta, tá gach sraith 168mm ar airde. Má chuireann sé 7 sraith ar bharr a chéile, cén airde a bheidh sé? _____

5. Le linn comórtais, rith 6 bhall de theaghlach 8km 65m. Cad é an fad iomlán a chludaigh an teaghlach? _____ km

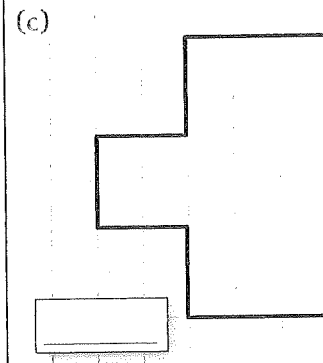
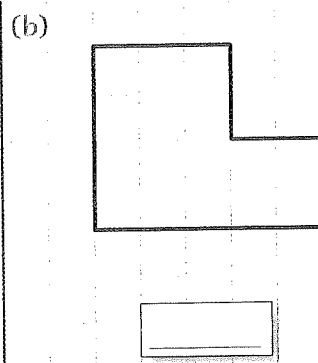
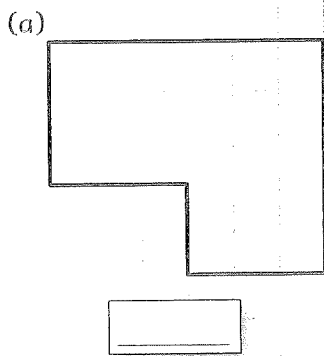
6. (a) cm mm	(b) cm mm	(c)	(d)	(e)	(f)
$\begin{array}{r} 7 \overline{)161} \\ \hline \end{array}$	$\begin{array}{r} 6 \overline{)402} \\ \hline \end{array}$	$\begin{array}{r} 4 \overline{)97.52\text{m}} \\ \hline \end{array}$	$\begin{array}{r} 7 \overline{)40.6\text{cm}} \\ \hline \end{array}$	$\begin{array}{r} 8 \overline{)140.32\text{km}} \\ \hline \end{array}$	$\begin{array}{r} 6 \overline{)78.54\text{m}} \\ \hline \end{array}$

7. (a) $\frac{1}{4}$ de 67.32m = _____ (b) $\frac{3}{4}$ de 17m 56cm = _____ (c) $\frac{3}{5}$ de 12.85m = _____

8. (a) $(654\text{cm} + 2\frac{1}{8}\text{m}) \times 4$ (b) $(39\text{km} - 12\text{km } 48\text{m}) \div 6$ (c) $(19\frac{7}{10}\text{cm} + 88\text{mm}) \times 7$
 (d) $(9\frac{1}{4}\text{km} - 2858\text{m}) \div 4$ (e) $(56\text{mm} + 23.6\text{cm}) \times 9$ (f) $(41\text{m} - 8\frac{4}{100}\text{m}) \div 8$

9. Leag conraitheoir leictreach amach 6 píosa cábla leictreach den fhad céanna agus é ag obair ar áit nua.
 (a) Má bhí gach píosa 27m 63cm ar fad, cad é fad iomlán an chábla a d'úsáid sé? _____
 (b) Cén fad a bhí fágtha ar rolla an chábla má bhí 206.5m ann ar dtús? _____
 (c) Cén fad a bheadh gach píosa dá mbeadh an rolla iomlán (206.5m) roinnte go cothrom i 7 bpíosa den fhad céanna?

10. Faigh an t-inlíne do gach cruth (seasann gach cearnóg do 1cm²).



USING WORDS

Colloquialisms are common expressions used in conversation. They have a meaning different from that which appears at first sight.

Examples: See eye to eye.

Turn a deaf ear.

Fight tooth and nail.

By the skin of one's teeth.

To agree with a person.

Not to listen.

To be very determined.


Barely, narrowly succeed.

A The colloquialisms in these sentences are highlighted. Rewrite the sentences replacing the colloquialisms with your own words.

1. The audience cheered their heads off at the end of the performance.
2. It was raining cats and dogs.
3. Megan made a lightning dash to school.
4. Paraic was the apple of his mother's eye.
5. When the teacher talked about the visit the class were all ears.
6. Mike and Deirdre were always at loggerheads.
7. Carol's heart was in her mouth when she heard the strange voice.
8. The detective smelled a rat when the thief told him where he had got the silver cup from.
9. Mr O' Brien kept his wife in the dark about his plans.
10. After getting all his spellings wrong, Alan had to face the music.

B Write the meaning of these colloquialisms.

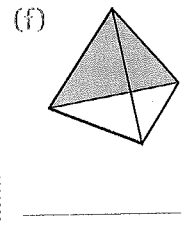
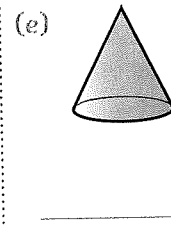
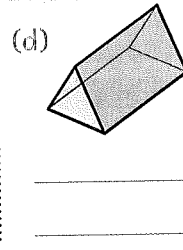
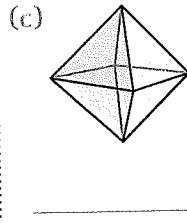

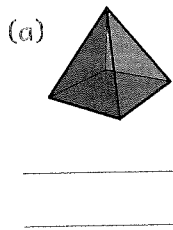
1. To hang one's head
2. To be tight-lipped
3. To turn a blind eye
4. To turn the other cheek
5. To be armed to the teeth
6. To hold one's tongue
7. To take forty winks
8. To be cold-blooded
9. To turn up one's nose
10. To live from hand to mouth
11. To nip something in the bud
12. To mind one's p's and q's
13. To hit the nail on the head
14. To draw the line



15. To hit below the belt
16. To rain cats and dogs
17. To turn over a new leaf
18. To put one's foot in it
19. To let the cat out of the bag
20. To blow one's trumpet

1. Scríobh an t-ainm ceart faoi gach cruth 3T.

cón pirimid chearnógach priosma triantánach sorcóir ochtaihéadrán teitrihéadrán



2. Críochnaigh na ceisteanna thíos a bhaineann le hiolrú agus le roinnt.

- | | | | | |
|-----------------------|-----------------------|----------------------|----------------------|----------------------|
| (a) 8×10 | (b) 35×10 | (c) 40×10 | (d) 6×100 | (e) 51×100 |
| (f) $19 \times 1,000$ | (g) $72 \times 1,000$ | (h) 16.2×10 | (i) 73.1×10 | (j) 47.3×10 |

- | | | | | |
|--------------------|--------------------|-------------------|--------------------|--------------------|
| 3. (a) $42 \div 7$ | (b) $72 \div 8$ | (c) $36 \div 6$ | (d) $56 \div 8$ | (e) $54 \div 9$ |
| (f) $70 \div 10$ | (g) $46.6 \div 10$ | (h) $570 \div 10$ | (i) $610 \div 100$ | (j) $830 \div 100$ |

- | | | | | |
|---------------------------------|------------------------------|------------------------------|------------------------------|------------------------------|
| 4. (a) $\text{€}26.37 \times 4$ | (b) $\text{€}17.45 \times 8$ | (c) $\text{€}53.58 \times 7$ | (d) $\text{€}46.74 \times 6$ | (e) $\text{€}37.69 \times 5$ |
| (f) 273×36 | (g) 184×57 | (h) 367×48 | (i) 352×64 | (j) 256×79 |

5. Scríobh na hamanna digiteacha thíos i bhfoirm analógach.

- | | | | | |
|---|---|---|---|---|
| (a)  | (b)  | (c)  | (d)  | (e)  |
|---|---|---|---|---|


6. Scríobh na hamanna analógacha seo i bhfoirm dhigiteach.

- | | |
|---------------------------------|-----------------------------|
| (a) 10 chun 6 ar maidin. | (b) 20 tar éis 7 tráthnóna. |
| (c) Ceathrú chun 3 san iarnóin. | (d) 25 chun 10 ar maidin. |
| (e) 5 chun 11 ar maidin. | (f) 20 chun 5 ar maidin. |

- | | | | | |
|--|---|---|---|---|
| 7. (a) $\begin{array}{r} \text{uair nóim} \\ 5 \quad 41 \\ - 2 \quad 18 \\ \hline \end{array}$ | (b) $\begin{array}{r} \text{uair nóim} \\ 3 \quad 19 \\ + 1 \quad 38 \\ \hline \end{array}$ | (c) $\begin{array}{r} \text{uair nóim} \\ 6 \quad 24 \\ - 4 \quad 43 \\ \hline \end{array}$ | (d) $\begin{array}{r} \text{uair nóim} \\ 3 \quad 35 \\ + 2 \quad 57 \\ \hline \end{array}$ | (e) $\begin{array}{r} \text{uair nóim} \\ 7 \quad 12 \\ - 2 \quad 36 \\ \hline \end{array}$ |
|--|---|---|---|---|

8. Cé mhéad uair an chloig agus nóiméad atá ó:

- | | | |
|-----------------------|-----------------------|-----------------------|
| (a) 6.20in go 10in | (b) 3.10rn go 5.45rn | (c) 8.22in go 11.06in |
| (d) 10.50rn go 2.17in | (e) 8.43rn go 12.27in | (f) 9.38rn go 3.11in |

9.  Thaistil Pól ar thraein ó 7.38rn go 8.45rn agus ansin ar bhus ó 08:58 go 09:36. Cé fad ama a bhí sé ag taisteal san iomlán ar an lá seo? _____

10. Tá 5 urlár i gcarrchlós i lár na cathrach agus tá spás ann le haghaidh 67 carr ar gach urlár. Cé mhéad spás nach bhfuil líonta má tá 269 carr sa charrchlós cheana féin? _____

11. Déanann monarcha cartáin agus déanann sí 28,000 cartán sa lá agus pacálann sí iad i mboscaí 100 cartán. Cé mhéad bosca a phacálann an mhonarcha gach lá? _____

Súil siar

SÚIL SIAR

1. (a) $1.73 + 3.28 + 5.96 =$ _____ (b) $4.08 + 2.77 + 1.9 =$ _____ (c) $8.3 - 3.65 =$ _____
 (d) $2.69 + 0.83 + 4.73 =$ _____ (e) $6.74 + 0.85 + 2.08 =$ _____ (f) $6.2 - 2.038 =$ _____

2. Scríobh na codáin seo mar chodáin dheachúlacha.

(a) $\frac{3}{10} =$ _____ (b) $\frac{216}{1000} =$ _____ (c) $\frac{49}{100} =$ _____ (d) $\frac{5}{100} =$ _____ (e) $\frac{653}{1000} =$ _____
 (f) $\frac{30}{1000} =$ _____ (g) $\frac{29}{1000} =$ _____ (h) $\frac{105}{1000} =$ _____ (i) $\frac{72}{100} =$ _____ (j) $\frac{7}{1000} =$ _____

3. (a) $75\text{mm} =$ _____ cm _____ mm (b) $26\text{mm} =$ _____ cm _____ mm (c) $3\text{mm} =$ _____ cm _____ mm
 (d) $6.9\text{cm} =$ _____ cm _____ mm (e) $4.3\text{cm} =$ _____ cm _____ mm (f) $0.8\text{cm} =$ _____ cm _____ mm

4. (a) $5.324\text{km} =$ _____ m (b) $7.017\text{km} =$ _____ m (c) $3.6\text{km} =$ _____ m (d) $0.18\text{km} =$ _____ m

5. (a) $2.685\text{kg} =$ _____ g (b) $4.703\text{kg} =$ _____ g (c) $6.19\text{kg} =$ _____ g (d) $5,716\text{g} =$ _____ kg

6. (a)
$$\begin{array}{r} 1.539\text{l} \\ + 3.286\text{l} \\ \hline \end{array}$$
 (b)
$$\begin{array}{r} 5.306\text{l} \\ - 2.823\text{l} \\ \hline \end{array}$$
 (c)
$$\begin{array}{r} 3.065\text{l} \\ - 1.887\text{l} \\ \hline \end{array}$$
 (d)
$$\begin{array}{r} 4.528\text{l} \\ + 2.496\text{l} \\ \hline \end{array}$$
 (e)
$$\begin{array}{r} 6.150\text{l} \\ - 4.874\text{l} \\ \hline \end{array}$$
 (f)
$$\begin{array}{r} 5.716\text{l} \\ - 4.757\text{l} \\ \hline \end{array}$$

7. (a) $(5\frac{3}{4}\text{kg} + 2\text{kg } 76\text{g} + 1.839\text{kg}) \times 8 =$ _____ (b) $(2\frac{3}{5}\text{l} + 4\frac{438}{1000}\text{l} + 1.674\text{l}) \times 9 =$ _____
 (c) $(4,169\text{g} + 2\frac{85}{1000}\text{kg} + 1\frac{3}{4}\text{kg}) \div 6 =$ _____ (d) $(4,060\text{m} + 3\frac{56}{1000}\text{km} + \frac{9}{1000}\text{km}) \div 3 =$ _____

8. (a) $15 + (36 \div 4) =$ _____ (b) $(72 \div 8) \times 7 =$ _____ (c) $12 \times (4 + 5) =$ _____
 (d) $6 \times 9 - 27 =$ _____ (e) $31 + 63 \div 9 =$ _____ (f) $81 - 9 \times 5 =$ _____

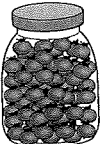
9. Scríobh na céatadáin seo mar chodáin sna téarmaí is ísle.

(a) $40\% =$ _____ (b) $35\% =$ _____ (c) $70\% =$ _____ (d) $55\% =$ _____ (e) $5\% =$ _____

10. Scríobh an céatadán atá cothrom le gach ceann de na codáin seo.

(a) $\frac{6}{10} + \frac{7}{100} =$ _____ (b) $\frac{3}{10} + \frac{28}{100} =$ _____ (c) $\frac{8}{10} - \frac{53}{100} =$ _____ (d) $\frac{74}{100} - \frac{4}{10} =$ _____

11. I dturgnamh eolaíochta, líonann Michelle coimeádán le 345ml uisce. Cé mhéad uisce a úsáideann sí má dhéanann sí an turgnamh 3 huair? _____ l


12.  Tá 475g meáchain i gcruiscín trátaí griantriomaithe. Tá ola sa chruiscín, ach gan an ola tá 385g meáchain sa chruiscín. Cén meáchan ola a bhí sa chruiscín? _____ g

13. De Céadaoin, bhí 6 rang ag Donncha agus mhair gach rang 35 nóim. Céan fad a chaitheann sé i Ranganna Dé Céadaoin? _____ uair _____ nóim

14. Roinneann Paula 0.6 lítir sú oráiste idir 6 ghloine go cothrom.

(a) Cé mhéad ml atá i ngach gloine? _____ ml
 (b) Cé mhéad ml a bheadh i ngach gloine dá mbeadh 16 ghloine aici? _____ ml



 **Cuir líne faoin litriú ceart.**

1	Stásúin	Stáisiuin	Stáisiún
2	D'fhéach mé	D'fheic mé	Fhaca mé
3	D'éist mé ar an teilifís	D'éist mé as an teilifís	D'éist me leis an teilifís
4	Sraith theilifíse	Sraith theilifís	Sraith Teilifíse
5	Mí-oiriúnach	Mí-óiriúnach	Míoiriúnach

1	B'fhéidir	Béidir	Bfhéidir
2	Scannán Grinn	Scannán Ghrinn	Scannán Ghreann
3	Scannán Úafáis	Scannán Uafás	Scannán Uafáis
4	An rud is fear liom	An rud is farr liom	An rud is fearr liom
5	Suimiúil	Simiúil	Sumúil

1	Scáileán	Scaileán	Scálán
2	Cnaipa	Cnapa	Cnaipe
3	Fógra	Fogra	Fógrá
4	Láithreoir	Láithróir	Laithreoir
5	Iriseóir	Iriseoir	Irisóir

1	Scannán	Scannan	Scanán
2	Clár Fáisnéise	Clár Faisnéise	Clár Fhaisnéise
3	Idirlíon	Idir-líon	Idirlín
4	Suíomh idirlíon	Suíomh Idirlíne	Suíomh idirlín
5	Físeán	Físeán	Fiseán

1	Telifís	Teilifís	Teilifís
2	Suimiúil	Suimiúil	Suimúil
3	Cáiliúl	Cáiiúil	Caiiúil
4	Pictiúrlann	Pictiúirlann	Pictiurlann
5	Clár Teilifís	Clár Teilifíse	Clár Teilifíse



Tasc scríofa

Líon an bhearna leis an réamhfhocal cúí:

Le

1. Labhair an príomhoide _____ nuair a bhíomar déanach.
2. 'Beidh mé ag caint _____ amárach,' arsa an dochtúir leis na hothair.
3. Tá na laethanta saoire ag teacht, táim ag súil go mór _____.
4. Táim stiúgha _____ an ocra.

Do

5. Dia _____, a chairde. Conas tá sibh?
6. Labhair an Garda go borb leis an ngadaí agus d'inis sé an scéal ar fad _____.
7. 'Tabhair _____ iasacht do gheansaí,' arsa mo dheirfiúr liom.
8. Tá siad tuirseach, tá sé in am _____ dul a chodladh.

Ar

9. Cuirigí _____ bhur gcótaí, tá sé fuar amuigh.
10. Chuir a chuid cainte déistin _____.
11. In ainm Dé, céard atá _____ siúl anseo?

Ag

12. 'Tá ceithre thicéad _____ don cheolchoirm,' arsa na buachaillí.
13. 'Níl an freagra _____,' arsa an cailín ciúin.
14. Chuaigh na cailíní chuig an dioscó aréir agus bhí an-spórt _____.

De

15. Bhain Deirdre a cóta _____.
16. 'Tá mé buíoch _____,' arsa an tUachtarán leis an dalta a chabhraigh leis.
17. An bhfuil an dán ar eolas _____ ghlánmheabhair agat?
18. Bainigí _____ na caipíní anseo, níl cead caipíní a chaitheamh sa halla.

As

19. Baineadh geit _____ nuair a chuala mé an scéal.
20. Lig Siobhán béic _____ nuair a chonaic sí an luch.
21. Bhí faitíos ar Jennifer roimh mhadraí mar baineadh plaic _____ a cos uair amháin.

Roimh

22. 'Tá fáilte _____,' arsa fear an óstáin leis na turasóirí.
23. Tá tarbh fiáin sa pháirc, tá eagla orm _____.
24. Bí cinnte go mbeidh sibh sa bhaile _____ a deich a chlog.
25. Nuair a tháinig na daltaí nua isteach sa scoil chuir an príomhoide fáilte _____.

Faoi

26. Thug an múinteoir _____ deara go raibh dalta as láthair sa rang.
27. Chuir an Garda an doras _____ ghlas sa stáisiún.
28. 'Ná bí ag caint _____ Sheán,' arsa na cailíní.
29. 'An bhfuil tú ag magadh _____,' arsa an buachaill liom.

Ó

30. 'Cad atá ag teastáil _____,' a d'fhiafraigh an siopadóir díom.
31. Bhí Sinéad tinn ar scoil agus theastaigh _____ dul abhaile.
32. Téann na gasúir _____ theach go teach ag spraoi ar Oíche Shamhna.
33. Tá canna oráiste _____ Shíle agus _____ Chiara mar tá tart orthu.

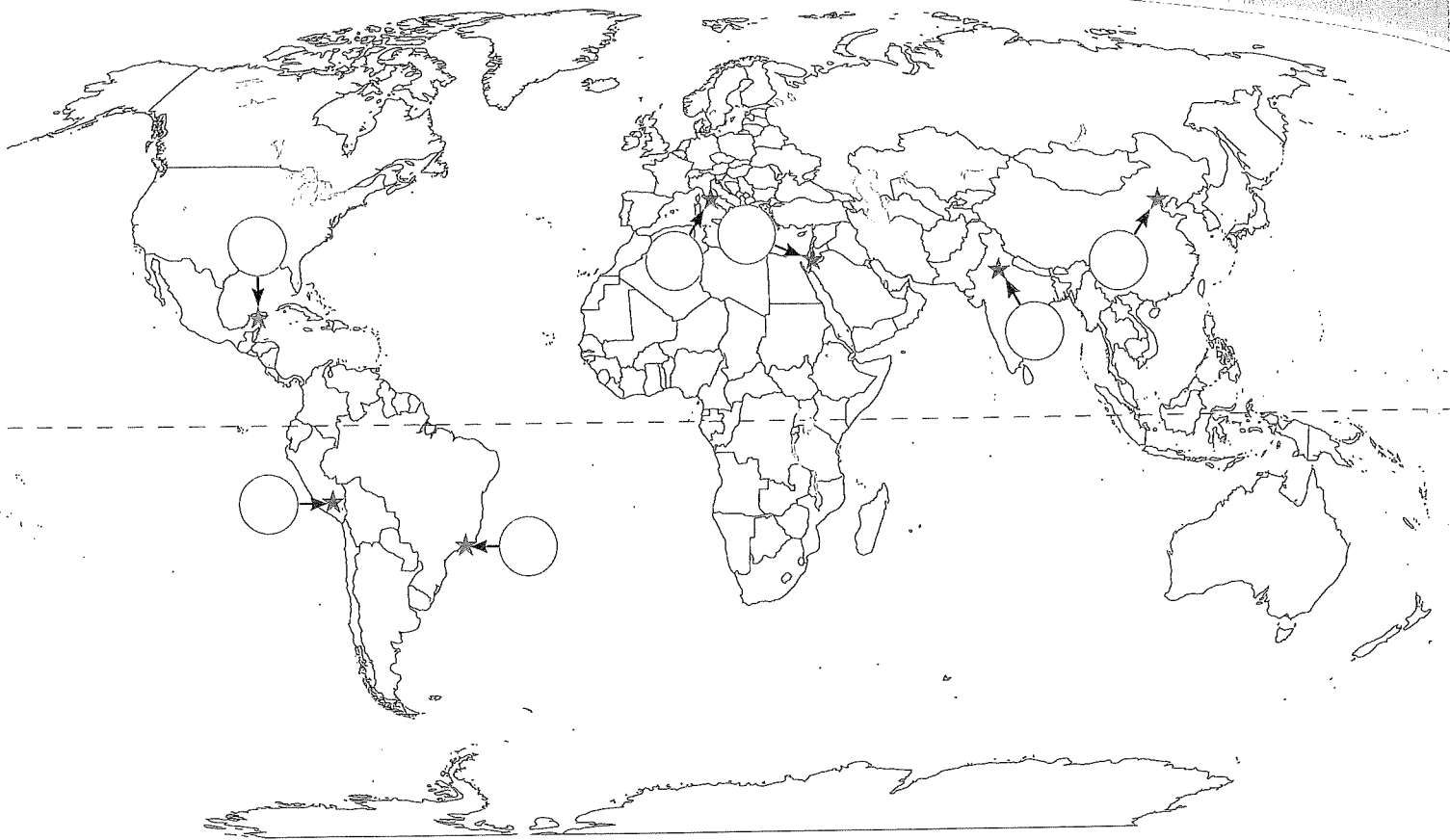
Chuig

34. Chuaigh mé _____ agus dúirt mé leis go raibh brón orm.
35. 'Scríobh Denise litir _____ óna laethanta saoire san Fhrainc,' arsa Máire.
36. Labhróidh mé leat an tseachtain seo _____.

Thar

37. Léim na capaill _____ na claíocha i rás na gcapall.
38. Chuamar _____ lear ar ár laethanta saoire.
39. 'Chuaigh na rothaithe _____ go tapa i rás Tour de France,' arsa Rebecca.
40. Níor stop an polaiteoir den chaint, chuaigh sé _____ fóir ar fad.





In 2007 millions of people across the world voted to choose seven new wonders of the world. They chose from a list of more than 200 existing monuments across the world. These became known as the Seven Wonders of the Modern World.

B Label the Seven Wonders of the Modern World on the map. Use the clues in Activity A to find their locations.

- | | | |
|--------------------------------|----------------------|----------------------|
| 1. Christ the Redeemer (A) | 2. The Colosseum (B) | 3. Chichen Itza (C) |
| 4. Machu Picchu (D) | 5. Petra (E) | 6. The Taj Mahal (F) |
| 7. The Great Wall of China (G) | | |

C Make a list of the Seven Wonders of Ireland. They can be natural (e.g. Giant's Causeway) or made by people (e.g. Newgrange). Give a brief description of each.

	Wonder	Description
1.		
2.		
3.		
4.		
5.		
6.		
7.		