


Lch tablaí-Máirt 28ú

$56 \div 8 =$ _____	$4 \times 6 =$ _____	$9 \times 11 =$ _____	$10 \times 4 =$ _____	$4 \times 2 =$ _____
$8 \times 1 =$ _____	$5 \times 6 =$ _____	$12 \times 6 =$ _____	$66 \div 6 =$ _____	$16 \div 2 =$ _____
$24 \div 3 =$ _____	$10 \div 2 =$ _____	$3 \times 10 =$ _____	$9 \times 11 =$ _____	$9 \times 6 =$ _____
$3 \times 3 =$ _____	$1 \times 3 =$ _____	$7 \times 9 =$ _____	$2 \times 10 =$ _____	$12 \times 8 =$ _____
$55 \div 5 =$ _____	$24 \div 12 =$ _____	$45 \div 5 =$ _____	$10 \times 11 =$ _____	$18 \div 9 =$ _____
$8 \times 12 =$ _____	$5 \times 3 =$ _____	$8 \times 8 =$ _____	$5 \times 5 =$ _____	$12 \times 4 =$ _____
$6 \times 5 =$ _____	$36 \div 9 =$ _____	$10 \times 8 =$ _____	$8 \times 7 =$ _____	$12 \times 7 =$ _____
$10 \times 9 =$ _____	$1 \times 9 =$ _____	$8 \times 5 =$ _____	$4 \times 10 =$ _____	$3 \times 5 =$ _____
$6 \times 10 =$ _____	$2 \times 3 =$ _____	$8 \times 2 =$ _____	$72 \div 8 =$ _____	$8 \times 12 =$ _____
$9 \times 8 =$ _____	$4 \times 1 =$ _____	$4 \times 3 =$ _____	$11 \times 8 =$ _____	$3 \times 6 =$ _____
$99 \div 11 =$ _____	$10 \times 12 =$ _____	$4 \times 6 =$ _____	$8 \div 4 =$ _____	$28 \div 4 =$ _____
$9 \times 2 =$ _____	$4 \times 7 =$ _____	$6 \times 2 =$ _____	$63 \div 7 =$ _____	$63 \div 9 =$ _____
$10 \times 9 =$ _____	$6 \times 8 =$ _____	$7 \times 12 =$ _____	$7 \times 10 =$ _____	$64 \div 8 =$ _____
$42 \div 7 =$ _____	$8 \times 10 =$ _____	$15 \div 5 =$ _____	$77 \div 7 =$ _____	$2 \times 6 =$ _____
$2 \times 5 =$ _____	$6 \times 11 =$ _____	$12 \times 2 =$ _____	$3 \times 9 =$ _____	$11 \times 12 =$ _____
$9 \times 10 =$ _____	$7 \times 8 =$ _____	$2 \times 7 =$ _____	$6 \times 5 =$ _____	$3 \times 2 =$ _____
$9 \div 3 =$ _____	$7 \times 11 =$ _____	$10 \times 5 =$ _____	$7 \times 9 =$ _____	$8 \times 11 =$ _____
$6 \times 6 =$ _____	$8 \times 7 =$ _____	$14 \div 7 =$ _____	$11 \times 6 =$ _____	$9 \times 4 =$ _____
$8 \times 6 =$ _____	$5 \times 3 =$ _____	$28 \div 7 =$ _____	$2 \times 7 =$ _____	$70 \div 7 =$ _____

Fad – méadair agus ceintiméadair



1. Líon isteach na greillí. Cabróidh an tslat mhéadair leat!


	cm	codán	deachúil
(a)	20cm	$\frac{2}{10}$ m	0.2m
(b)		$\frac{8}{10}$ m	
(c)			0.7m
(d)	90cm		
(e)	23cm		
(f)		$\frac{46}{100}$ m	

	cm	codán	deachúil
(g)			0.78m
(h)	8cm		
(i)		$\frac{13}{100}$ m	
(j)			0.3m
(k)	100cm		
(l)			0.09m

Níos mó ná méadar



$$130\text{cm} = 1\text{m } 30\text{cm} = 1\frac{3}{10}\text{m} = 1.3\text{m}$$



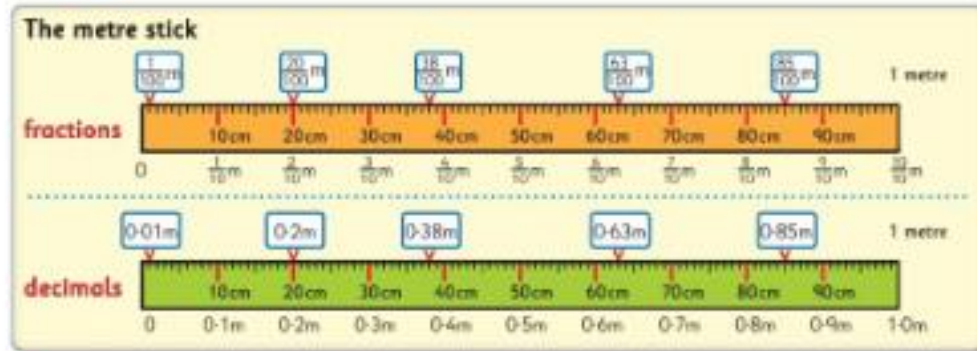
$$174\text{cm} = 1\text{m } 74\text{cm} = 1\frac{74}{100}\text{m} = 1.74\text{m}$$

2. Líon isteach na greillí.

	cm	m cm	codán	deachúil
(a)	136cm	1m 36cm	$1\frac{36}{100}$ m	1.36m
(b)	182cm			
(c)		1m 17cm		
(d)			$1\frac{9}{10}$ m	
(e)				1.06m

	cm	m cm	codán	deachúil
(f)	254cm			
(g)		2m 50cm		
(h)				3.2m
(i)	300cm			
(j)		4m 75cm		

Length – Metres and centimetres



1. Complete the grids. Use the metre sticks above to help you!


	cm	fraction	decimal
(a)	20cm	$\frac{2}{10}$ m	0.2m
(b)		$\frac{8}{10}$ m	
(c)			0.7m
(d)	90cm		
(e)	23cm		
(f)		$\frac{46}{100}$ m	

	cm	fraction	decimal
(g)			0.78m
(h)	8cm		
(i)		$\frac{12}{100}$ m	
(j)			0.3m
(k)	100cm		
(l)			0.09m

More than a metre



$$130\text{cm} = 1\text{m } 30\text{cm} = 1\frac{3}{10}\text{m} = 1.3\text{m}$$



$$174\text{cm} = 1\text{m } 74\text{cm} = 1\frac{74}{100}\text{m} = 1.74\text{m}$$

2. Complete the grids.

	cm	m cm	fraction	decimal
(a)	136cm	1m 36cm	$1\frac{36}{100}$ m	1.36m
(b)	182cm			
(c)		1m 17cm		
(d)			$1\frac{9}{10}$ m	
(e)				1.06m

	cm	m cm	fraction	decimal
(f)	254cm			
(g)		2m 50cm		
(h)				3.2m
(i)	300cm			
(j)		4m 75cm		

Grammar: Pronouns

A **pronoun** is a word that can be used instead of a noun. Personal pronouns replace people or things and include: **he, she, me, us, you, it, him, her, they, them, we.** **Examples:** Grandpa saw Lexi and **he** waved at **her**.

A Underline the pronouns in the sentences.

1. During the match the ball hit me on the face.
2. She took the dog to the vet because it was sick.
3. The students were happy because they received no homework.
4. Fred was so angry that he roared like a lion.
5. Did you finish cleaning the sitting room?
6. The monkeys screeched at us as we walked past the enclosure.
7. He led them up the steps and into a huge room.

B Replace the underlined nouns with pronouns.

1. Helen put the lead on the dog and took the dog for a walk.
2. Dad took my friends and I to the cinema.
3. James is the tallest boy in fourth class.
4. Mum gave money to my brother.
5. The coach told Susie to sit on the bench.
6. The children put their coats on before going outside.
7. My class and I are going on our school tour today.

C Fill in the blanks with suitable pronouns.


It was my birthday last week and my parents had a special surprise for _____. _____ told me I could finally have a puppy. I'd been asking for one for years. _____ got in the car and went to the dog breeder's house. She took _____ to meet the litter of puppies. As soon as _____ saw the smallest black labrador _____ knew that was the one I wanted.

'_____ is called Betty,' said the breeder.

When _____ lifted _____ up to give her a hug _____ licked _____ face.

_____ laughed and said, 'She's beautiful.'

We all love the new addition to our family, and she loves _____, too.



Write a paragraph about your friends or family. Use and underline personal pronouns.

Nature Portraits-Samples

