

Dé Máirt- 23ú Meitheamh


Dul siar tapa 6


1. Faigh $\frac{5}{8}$ de 48. _____

2. Scríobh an uimhir atá 407 níos lú ná 3412. _____

3. Scríobh $6 + \frac{9}{10} + \frac{7}{100}$ i bhfoirm dheachúlach. _____

4. Scríobh $8\frac{9}{100}$ i bhfoirm dheachúlach. _____

5.  Bhí €50 ag Seathrún. Cheannaigh sé scaif. Bhí € _____ fágtha aige.

6.  Scríobh an t-am anseo i bhfoirm dhigiteach.

7. Tá sé **9:32**. Scríobh an t-am anseo i bhfoirm dhigiteach. _____

8. Chaith Caitlín $\frac{3}{5}$ dá €30. Chaith sí € _____.

9. $72 \div 4 = (40 \div 4) + (\text{_____} \div 4)$

10. Cén cineál pirimide é an ceann sa phictiúr?



11. Thosaigh clár teilifíse ag **5:27**. Mhair sé 30 nóiméad. Chríochnaigh sé ag _____.

12. Mhair turas ar bhus 35 nóiméad. Má thosaigh sé ag **7:20**, cén t-am a chríochnaigh sé? _____


13. $69 \times 100 = \text{_____}$


14. Chuaigh Pól agus Póilín amach ag rothaíocht ag **4:43**. Chríochnaigh siad ag a 6 a chlog. Cé mhéad nóiméad a chaith siad ag rothaíocht? _____

15. Is $\frac{1}{2}$ d'uimhir é 30. Cad í an uimhir? _____

16. Scríobh luach an 7 mar chodán. **8.47** _____

17. Cuir ciorcal thart ar an uimhir is mó díobh seo: **14.07** **13.98** **14.2**






18.  Cé mhéad aghaidh atá ar an gcruth seo? _____

19.  Scríobh síos ainm an chrutha seo. _____

20. Cosnaíonn blús €15.60 agus cosnaíonn sciorta €22.20. Cén tsóinseáil a fuair Réiltín nuair a d'íoc sí as an mblús agus an sciorta le €50? € _____

A quick look back 6

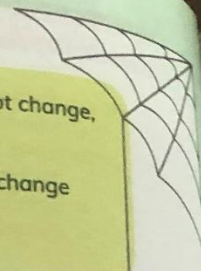


1. Find $\frac{5}{8}$ of 48.
2. Write the number that is 407 less than 3412.
3. Write $6 + \frac{9}{10} + \frac{7}{100}$ in decimal form.
4. Write $8\frac{9}{100}$ in decimal form.
5.  Joe had €50. He bought a scarf. He had € left.
6.  Write the time shown in digital form.
7. It is now **9:32**. Write what time it will be half an hour from now.
8. Kim spent $\frac{3}{5}$ of her €30. She spent € .
9. $72 \div 4 = (40 \div 4) + (\text{ } \div 4)$
10. What type of pyramid is shown in this picture? 
11. A television programme started at **5:27**. It lasted for 30 minutes. It ended at .
12. A bus journey lasted for 35 minutes. If it finished at **7:20**, at what time did it start?
13. $69 \times 100 =$
14. Pam and Prim began a cycle trip at **4:43**. They finished at 6 o'clock. How many minutes did they spend cycling? mins
15. $\frac{1}{3}$ of a number is 30. What is the number?
16. Write the value of the 7 as a fraction. **8.47**
17. Circle the biggest of these numbers: **14.07** **13.98** **14.2**
18.  How many faces has this shape?
19.  Write the name of this shape.
20. A blouse costs €15.60 and a skirt costs €22.20. What change had Vera when she bought one of each with her €50? €



Writing skills: Fact and opinion

- A **fact** is something that is true and can be proved. It does not change, no matter who says it.
Example: Chris Callaghan wrote *The Great Chocoplot*.
- An **opinion** is something that someone thinks or feels. It may change from person to person.
Example: *The Great Chocoplot* is a brilliant book.



A Are these facts or opinions?

1. Visiting the dentist is scary.
2. A baby cow is called a calf.
3. Ireland is the most beautiful country in Europe.
4. Carrauntoohil is the highest mountain in Ireland.
5. Spiders are creepy.
6. Picnics are better in the summer.
7. The best books are funny ones.



B Write a fact and an opinion for each topic.

	Fact	Opinion
My home town		
Milk		
Christmas		
Snakes		
Manchester United		

C Facts and opinions in a book review.

1. Look again at the book review on page 84.
2. Find three facts and three opinions.

D Facts and opinions about a picture.

Write four facts and four opinions about this picture.

