


















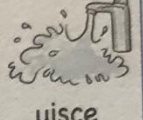








Déardaoín- 25ú Meitheamh

NA RÉAMHFHOCAIL

CAIBIDIL 8

						
peann	cailín	clann	bláthanna	mamáí	dobharchú	bóthar
						
cóipleabhar	siúnear	cóisir	fuinneog	sóinseáil	fomhuireán	deirfiúr
						
úll	bord	madra	salann	fear	uisce	cúisín
						
scéal	geata	fáinleoga	iasc	tarbh		

A. Lión na bearnaí. Úsáid/Ath-úsáid na focail ón mbosca.

di faoi dó dóibh faoin don dom fúinn chuig ón chugat

1. Bhuaill Áine le Máire agus thug sí peann di.
2. Bhí cúisín fa_____ Sheán ar an gcathaoir.
3. Thug Máire an peann luaidhe d_____.
4. Bhailigh Seán na cóipleabhair Ghaeilge dó_____.
5. Thug Máire an t-úll _____ cailín eile.
6. Rinne an siúnear seomra folcra nua f_____ staighre.
7. Tharraing Seán a chathaoir siar _____ mbord.
8. Thug Máire bronnantas d_____ do mo bhreithlá.
9. Bhí Seán ag caint fú_____ sa scéal sin.
10. Chuaigh an chlann go léir ch_____ an gcóisir.
11. D'imigh sé amach chu_____ an ngeata nuair a bhí sé ag fágáil.
12. Bhí brón ar Úna agus thug Máire bláthanna _____.
13. 'Tá mé ag teacht _____,' arsa Liam.
14. Rinne na fáinleoga nead _____ díon.



B. I do chóipleabhar. Scríobh na ceithre réamhfhocail eile (faoi, ó, roimh, chuig) mar seo: Do: dom, duit, dó, di, dúinn, daoibh, dóibh. Ná féach ar an leabhar!

Dul siar tapa 8

1. Cad é fad iomlán 1.5 km agus 1400m?

_____ km

2. Scríobh 1.07 km ina mhéadair.

_____ m

3. $\frac{3}{4}$ km = _____ m

4. Cé mhéad nóiméad atá in $2\frac{1}{2}$ uair an chloig?

_____ nóiméad

5. $54 \div 6 =$ _____

6. Scríobh an luach atá ag an 7 i bhfoirm chodáin.

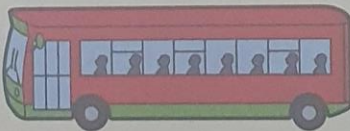
26·07

7. Cén luach atá ag an 9 a bhfuil líne faoi? €95·94 _____ c

8. Cén luach atá ag an 8 a bhfuil líne faoi? €38·68 _____ c

9. $23·47 + 6·3 =$ _____

10. Tá spás ar bhus do 40 duine. Cé mhéad bus a theastódh chun 145 duine a thabhairt amach go páirc spraoi? Bí cúramach!



11.



Cosnaíonn ribín €1.25 in aghaidh an $\frac{1}{2}$ m. Cé mhéad a chosnóidh $1\frac{1}{2}$ m? € _____

12. Scríobh an uimhir atá ar lár sa seicheamh seo.

70, 63, 56, _____, 42, 35

13.



Cosnaíonn liathróid pheile €19.50. Tá €10 ag Áine agus tá €6.20 ag Liam. Cé mhéad níos mó a theastaíonn uathu chun an liathróid a cheannach? € _____

14. Cuir cíorcal thart ar an gcodán is mó.


$\frac{2}{3}$ $\frac{3}{4}$ $\frac{5}{6}$ $\frac{7}{12}$

15. Tá _____ nóiméad in 3 uair 17 nóiméad.

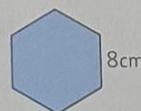
16. Cad í imlíne na cearnóige seo?

_____ cm

9cm



17.



8cm

Is é _____ cm imlíne an heicseagáin seo.

18. $43·59 - 0·07 =$ _____

19. $4 \times 8 \times 10 =$ _____

20. Tá dath liath ar $\frac{3}{8}$ de chearca Sheáin. Tá 24 cearc liath aige. Cé mhéad cearc nach bhfuil liath? _____

A quick look back 8

LOOK
BACK

1. What is the total length of 1.5km and 1400m?

_____ km

2. Write 1.07km as metres.

_____ m

3. $\frac{3}{4}$ km = _____ m

4. How many minutes are there in $2\frac{1}{2}$ hours?

_____ minutes

5. $54 \div 6 =$ _____

6. Write the value of the 7 in fraction form.

26.07

7. What is the value of the underlined 9? €9594 _____ c

8. What is the value of the underlined 8? €388 _____ c

9. $23.47 + 6.3 =$ _____

10. A bus can carry 40 people. How many buses are needed to bring 145 people to a theme park? Be careful!



11.  Ribbon costs €125 per $\frac{1}{2}$ m. How much will $1\frac{1}{2}$ m cost? € _____

12. Write the missing number in this sequence.

70, 63, 56, _____, 42, 35

13.  A football costs €19.50. Ann has €10 and Andrew has €6.20. How much more do they need to buy the ball? € _____

14. Ring the biggest fraction.


$\frac{2}{3}$ $\frac{3}{4}$ $\frac{5}{6}$ $\frac{7}{12}$

15. There are _____ minutes in 3 hours 17 mins.

16. What is the perimeter of this square?

9cm



17.  The perimeter of this regular hexagon is _____ cm.

18. $43.59 - 0.07 =$ _____

19. $4 \times 8 \times 10 =$ _____

20. $\frac{3}{8}$ of Jack's hens are grey. He has 24 grey hens. How many of his hens are not grey? _____

A book review by: _____

Author: _____

Title: _____

What was the story about?

Who were the characters?

What did you like about the book?

Draw your favourite picture from the book.

Your rating: ___ / 10